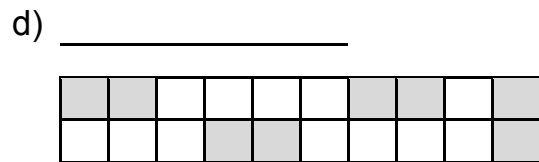

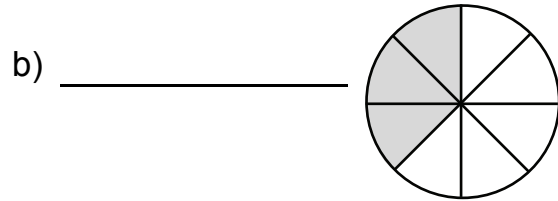
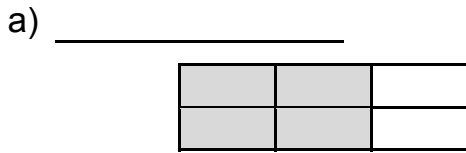


Fiche
2 - 2
Section 2.2

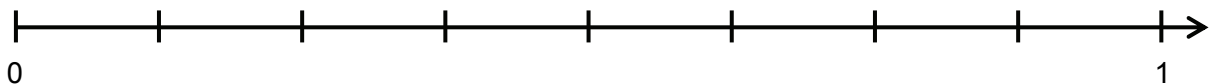
Activités supplémentaires
Les différents sens de la fraction

1. Quelle fraction de chaque figure est colorée ?

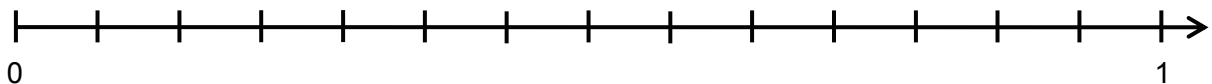


2. Place les fractions sur les droites numériques.

- a) $\frac{7}{8}$ $\frac{3}{4}$ $\frac{1}{8}$ $\frac{3}{8}$ $\frac{1}{2}$



- b) $\frac{2}{14}$ $\frac{8}{14}$ $\frac{2}{7}$ $\frac{1}{2}$ $\frac{11}{14}$



3. Olivier a 15 muffins. Les $\frac{3}{15}$ sont au chocolat, les $\frac{3}{5}$ aux bleuets et le reste aux carottes. Quelle fraction de muffins aux carottes Olivier a-t-il ?

